

# ST. COLUMBUS SCHOOL

Dayal Bagh, Surajkund, Faridabad-121009 (Haryana)

## CLASS – III WINTER BREAK ASSIGNMENT

**Dear Parent,**

**Season's Greetings!**

Holidays are an integral part of a student's life. It's a time for fun, a time to explore and a time to learn in different ways. When holidays are given a meaningful direction, it results in a productive and enjoyable time. Let's use these holidays to pursue some hobbies and apply our minds creatively to learn new things and to bring a new change in the environment in our own individual way.

**Instructions:-**

- ✓ Take the help of your parents when necessary.
- ✓ The written part should be neatly presented in your own handwriting.
- ✓ Do reading and writing practice daily.

Keeping the children safe is of paramount importance and we have things to do and avoid for the protection of children during the winter season.

Winter season is back and so is the season of cold and cough. Children can fall prey to the wrath of the winter season. Hence, providing protection and taking care of them right from the start is essential whenever you are taking them out.

Kindly bring the WINTER BREAK ASSIGNMENT duly completed on the first working day after holidays.

**Kindly bring the WINTER BREAK ASSIGNMENT duly completed on the first working day after holidays.**

SUBJECT- ENGLISH  
L – 16 “RANI IN DISTRESS – II”  
L-19 – “PRESENT CONTINUOUS TENSE”

DATE : \_\_\_\_\_

NAME- \_\_\_\_\_

SECTION - \_\_\_\_\_

ROLL NO. - \_\_\_\_\_

Q1. Write the meanings of the following words:

a) gently \_\_\_\_\_

b) swooped \_\_\_\_\_

Q2. Make sentences with the following words:

a) backyard \_\_\_\_\_

b) suddenly \_\_\_\_\_

Q3. Fill in the blanks:

a) One morning, I heard a \_\_\_\_\_ repeated cries.

b) The boy found a squirrel caught by a \_\_\_\_\_.

Q4. Who said the following words and to whom?

a) “That is Rani’s home.”  
\_\_\_\_\_

b) “Rani is afraid of the snake and the kite.”  
\_\_\_\_\_

Q5. Fill in the blanks with present continuous form of the verbs given in the brackets:

a) My mother \_\_\_\_\_ delicious food. (cook)

b) I \_\_\_\_\_ to school. (go)

c) They \_\_\_\_\_ the toilet. (clean)

Q6. Make 5 flash cards related to present continuous tense.

\_\_\_\_\_

SUBJECT- MATHEMATICS  
CH – 15 “TIME”

DATE : \_\_\_\_\_

NAME - \_\_\_\_\_

SECTION - \_\_\_\_\_

ROLL NO. - \_\_\_\_\_

Q1. Write the time:



\_\_\_\_\_




\_\_\_\_\_

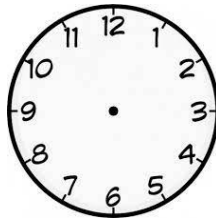


\_\_\_\_\_

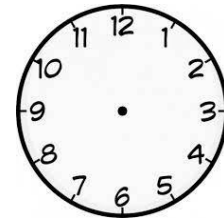
Q2. Draw the hands in the clock to indicate the given time:



Quarter past 9



Quarter to 5



Half past 7

Q3. Convert into minutes :

a) 4 hours

b) 6 hours 25 minutes

Q4. Convert into months :

a) 9 years

b) 7 years 6 months

Q5. Learn tables of 15, 16 and 17.

Q6. Make a colourful clock using A4 size sheet and waste material. (like ice-cream sticks, cardboard etc.)

SUBJECT- EVS  
CH – 11 AIR AND WATER

DATE : \_\_\_\_\_

NAME- \_\_\_\_\_

SECTION - \_\_\_\_\_

ROLL NO. - \_\_\_\_\_

Q1. Fill in the blanks.

a. \_\_\_\_\_ is one of the major source of water.

b. A slowly moving mass or river of ice is called \_\_\_\_\_.

c. Moving air is called \_\_\_\_\_.

Q2. Give one word answer.

a. Day-to-day condition of a place- \_\_\_\_\_

b. Trees shed leaves in this season- \_\_\_\_\_

c. Same weather for a period of time- \_\_\_\_\_

Q3. Write the names of the different seasons.

\_\_\_\_\_

\_\_\_\_\_

\_\_\_\_\_

Q4. Draw a neat and well-labeled diagram of 'Water cycle'.

Q5. Draw different phases of the moon using black and white glitter sheets on a A4 size sheet and label them.

**SUBJECT- COMPUTER**  
**CH- 2**

DATE : \_\_\_\_\_

NAME- \_\_\_\_\_

SEC. \_\_\_\_\_

ROLL NO. \_\_\_\_\_

Q1. Fill in the blanks.

1. \_\_\_\_\_ is usually fixed inside a camera.
2. \_\_\_\_\_ displays the output from the computer screen onto a larger screen.
3. \_\_\_\_\_ is known as the brain of computer.
4. A computer system is made up of \_\_\_\_\_ and \_\_\_\_\_.

Q2. Give two examples of each.

i. Input Devices

\_\_\_\_\_

\_\_\_\_\_

ii. Output Devices

\_\_\_\_\_

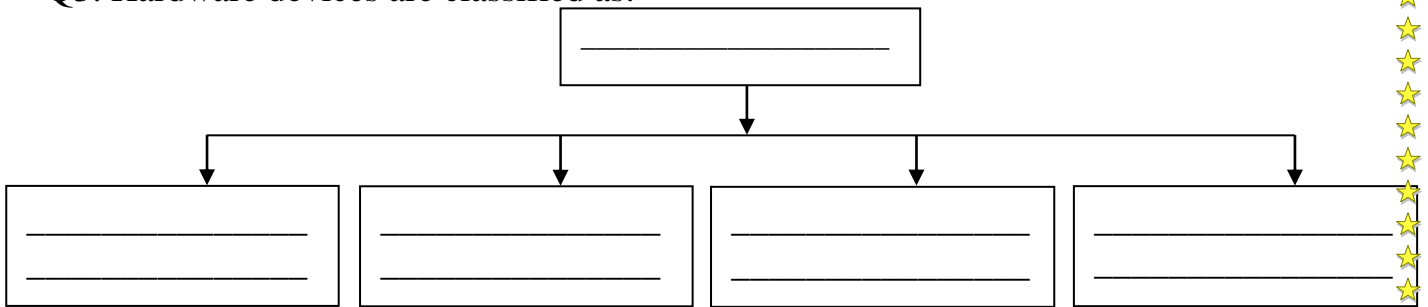
\_\_\_\_\_

iii. Storage Devices

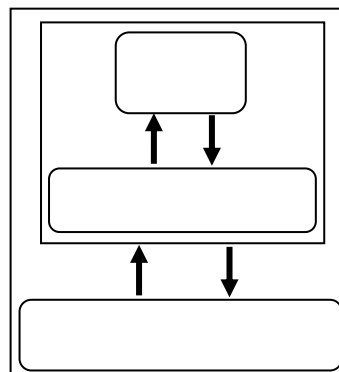
\_\_\_\_\_

\_\_\_\_\_

Q3. Hardware devices are classified as:



Q4. What are the three parts of CPU?



SUBJECT- HINDI

DATE-

NAME:.....

SECTION.....

ROLL NO.-.....

प्र०1) महात्मा बुद्ध के सिर से क्या बहने लगा?

उ०) .....

प्र०2) बच्चे पत्थर मार कर क्या तोड़ रहे थे?

उ०) .....

प्र०3) निम्नलिखित शब्दों के अर्थ लिखिए।

(क) चूक .....

(ख) निशाना .....

प्र०4) रिक्त स्थान भरिए।

भगवान बुद्ध की आँखों में ..... भरे थे।

प्र०5) निम्नलिखित वाक्यों में से क्रिया छाँटकर लिखिए।

(क) अध्यापिका जी बच्चों को पढ़ा रही हैं। .....

(ख) बच्चे पतंग उड़ा रहे हैं। .....

\*क्रियात्मक कार्य -

A4 साइज शीट पर ओणम त्योहार के विषय में पाँच पंक्तियाँ लिखिए तथा रंगोली बनाकर उसमें रंग

भरिए।

**Activity time!**

To pay homage to the courage of Sahibzada Zorawar Fateh Singh ji, younger sons of Shri Guru Gobind Singh ji, the tenth Guru of Sikhs, CBSE has decided to organize an activity to create awareness about the sacrifice made by them.

- Students have to make Thank You Card to express their gratitude towards the sacrifice done by the Sahibzadas. The cards can be addressed to Sahibzada Zorawar Singh ji and Sahbzada Fatteh Singh ji.
- Make Promise Card wherein they can make a promise to the Sahibzadas.