

ST. COLUMBUS SCHOOL

Dayal Bagh, Surajkund, Faridabad-121009 (Haryana)

WINTER BREAK ASSIGNMENT

SUBJECT- ENGLISH

CLASS – VI

NAME: _____ SEC. _____ ROLL NO. _____ DATE _____

Q1. Read the following passage and answer the questions that follow.

Global warming is the term used to describe a gradual increase in the average temperature of the Earth's atmosphere and its oceans. This causes a change in the Earth's climate. Global warming occurs when carbon dioxide (CO₂) and other air pollutants and greenhouse gases collect in the atmosphere and absorb sunlight and solar radiation that have bounced off the Earth's surface. Normally, this radiation would escape into space. But these pollutants, which can last for years even up to centuries in the atmosphere, trap the heat and make the planet warmer. This is known as the greenhouse effect.

Climatologists agree that the average temperature of the earth has risen between 0.4 and 0.8°C over the past 100 years. They feel that in the past 50 years, the average global temperature has increased at the fastest rate in recorded history. This is chiefly because the increased volumes of carbon dioxide and other greenhouse gases released by the burning of fossil fuels, land clearing, agriculture and other human activities have been the chief causes of the global warming that has occurred over the decade. Scientists now predict that average global temperatures could increase between 1.4 and 5.8°C by the year 2100.

Global warming has many environmental, economic, and health consequences. It will be manifested in the melting of the polar ice caps, as well as an increase in the occurrence of storm and other severe weather events such as wildfires. Rising sea levels could lead to coastal flooding. Thus, there could be pests, heat waves, heavy downpours and increased flooding as a result of global warming. And these could damage or destroy agriculture and fishing industry. Disruption of habitats such as coral reefs and the Alpine meadows could drive many plant and animal species to extinction. Allergies, asthma and infectious disease outbreaks will become more common due to higher levels of air pollution and the spread of conditions favourable to microorganisms and mosquitoes.

i. What is global warming?

ii. How does global warming occur?

iii. Name some human activities that lead to global warming.

iv . Mention any two consequences of global warming.

v . Give a suitable title to the passage.

Q2. Fill in the blanks with suitable preposition.

- i. The dog is grateful _____ its owner.
- ii. I know Jack _____ he was a little boy.
- iii. The boy _____ the store is quite young.
- iv. Mahatma Gandhi was born _____ 2nd October.
- v. Rupert is fond _____muffins.

Q3. Punctuate the following sentences.

i. is mrs singh your neighbour

ii. it rains heavily in india between june to September

iii. the taj mahal was built by shah jahan

iv. hurrah we won the match

v. where is my pen

Q4. Fill in the blanks with appropriate conjunctions.

- i. Both John _____ his wife are doctors.
- ii. We all respect him _____ he is an honest man.

- iii. Jim had to work on Saturday _____ he couldn't go to the park.
- iv. I could not find the place _____ I lost the map.
- v. The police searched through the crime scene many times _____ could not find any clues.

Q5. Mention the types of sentences.

- i. Please shut the windows and doors.

- ii. Do you like chocolate pastries?

- iii. Switch off the lights before you sleep.

- iv. Where are you going?

- v. Oh no! We missed the bus.

Q6. Re-arrange the following words to make meaningful sentences.

- i. are/you/why/laughing/him/at

- ii. work/succeed/must/to/life/hard/a/student/in

- iii. am/understand/I/saying/what/to/try/

- iv. complete/was/the/silence/hall/there/in

Q7. Answer the following questions.

- i. How did the mother find Tayo?

ii. What type of rice did the family eat for dinner?

iii. What type of a boy was Tayo?

Q8. Read the extract given below and answer the questions that follow.

*“Mirrors with panels of amber,
Daggers with handles of jade.”*

i. Name the poem and the poet.

ii. Who is selling the mirrors and daggers?

iii. What do you mean by ‘daggers’?

Q9. Write a diary entry in not more than 150 words describing the fun you had during your winter vacation. Also paste a few pictures related to it. Do it in A4 size sheet.

Q10. Make a full story from the given outlines.

Akbar told Birbal to prove----- a man could do anything for money----- a poor Brahmin was called ----- told to spend a night in a frozen pond in winter, to win a reward----- the Brahmin spent the entire night in the frozen pond----- the next morning he came for the reward ----Akbar asked how he had managed to spend the night in the pond-----the Brahmin innocently replied that he saw a ray of light a kilometre away-----kept looking at it all night-----Akbar refused to give the reward ----- Birbal was upset-----stopped coming to the court ----- Akbar paid a visit to his house----Birbal had lit a fire and kept a pot of khichdi ten metres away----- said only when the khichdi is ready----- he would attend the court-----Akbar realised his mistake and gave the reward to the poor Brahmin.

ST. COLUMBUS SCHOOL

Dayal Bagh, Surajkund, Faridabad-121009 (Haryana)

WINTER BREAK ASSIGNMENT SUBJECT – HINDI CLASS – VI

NAME - _____ SEC. - _____ ROLL NO. - _____ DATE - _____

प्रश्न 1 निम्नलिखित वाक्यों में से संज्ञा शब्द छाँटकर उनके भेद लिखिए।

वाक्य	संज्ञा शब्द	भेद
(क) कुतुबमीनार बहुत ऊँची इमारत है।
(ख) उन दोनों में गहरी मित्रता है।
(ग) राधिका गीत गा रही है।
(घ) बच्चे बहुत देर से खेल रहे हैं।

प्रश्न 2 दिए गए शब्दों के कोई दो पर्यायवाची शब्द लिखिए।

(क) आभूषण	—
(ख) उपवन	—
(ग) गणेश	—
(घ) किनारा	—

प्रश्न 3 निम्नलिखित मुहावरों का अर्थ लिखिए।

(क) अंग—अंग ढीला होना	—
(ख) आँखों में धूल झोंकना	—
(ग) अपना ही राग अलापना	—
(घ) आकाश के तारे तोड़ना	—

प्रश्न 4 रेखांकित शब्दों के लिंग बदलकर वाक्यों को दोबारा लिखिए।

(क) यह <u>गायक</u> बहुत अच्छा गाता है।	—
(ख) जंगल में <u>मोर</u> नाच रहा है।	—

(ग) अध्यापिका पढ़ा रही है। —

(घ) इस अभिनेता ने अच्छा अभिनय किया है। —

प्रश्न 5 दिए गए शब्दों का वचन बदलकर लिखिए।

(क) वस्तु — (ख) रुपया —

(ग) मकखी — (घ) शिक्षक —

प्रश्न 6 निम्नलिखित वाक्यों में काल का भेद बताइए।

(क) लड़कियाँ बहुत शोर मचा रही हैं। —

(ख) हम कल सूरजकुंड मेला देखने जाएँगे। —

(ग) गाड़ी स्टेशन से जा चुकी थी। —

(घ) गिलहरी मूँगफली खाती है। —

प्रश्न 7 निम्नलिखित वाक्यों में रेखांकित कारक शब्दों के भेद लिखिए।

(क) गिरीश बल्ले से खेल रहा है।

(ख) रंजीत की साइकिल टूट गई है।

(ग) बिल्ली मेज़ पर बैठी है।

(घ) माँ ने मेरे लिए हलवा बनाया है।

प्रश्न 8 निम्नलिखित प्रश्नों के उत्तर विस्तार से लिखिए।

(क) 'चिड़िया को अब भोजन के लिए कहीं भी उड़कर नहीं जाना पड़ेगा' केशव और श्यामा का यह सोचना कैसे गलत साबित हुआ?

.....

.....

.....

.....

.....

.....

ST. COLUMBUS SCHOOL

Dayal Bagh, Surajkund, Faridabad-121009 (Haryana)

WINTER BREAK ASSIGNMENT

SUBJECT: SANSKRIT

CLASS-VI

Name:----- Section: ----- Roll no: ----- Date: -----

प्रश्न 1 शब्दार्थाः लिखन्तु ।

- क) एकदा
- ख) सस्वेदं
- ग) पशूत्सवः
- घ) व्यजनानि

प्रश्न 2 प्रश्नानाम् उत्तराणि लिखत ।

क) पथिकः किं अवदत् ?

.....

ख) केषां कर्मवीरत्वं न नश्यति ?

.....

ग) अस्माभिः किं वक्तव्यम् ?

.....

प्रश्न 3 अव्ययपदं प्रयुज्यं कृत्वा वाक्यानि रचयत ।

- क) अधुना
- ख) तत्र
- ग) सर्वत्र

प्रश्न 4 समानार्थकपदानि लिखत ।

- क) दूरे
- ख) सूर्यः
- ग) जीर्णम्

प्रश्न 5 पञ्च पुष्पाणां नामानि संस्कृतहिन्दी भाषयोः लिखन्तु ।

संस्कृत

हिन्दी

.....
.....
.....
.....
.....

प्रश्न 6 संस्कृते संख्यावाचिशब्दान् लिखत ।

क) 25 ख) 26 ग) 39

प्रश्न 7 'हस्' धातु रूपाणि लड.लकारे लिखत ।

पुरुष	एकवचनम्	द्विवचनम्	बहुवचनम्
प्रथम पुरुष
मध्यम पुरुष
उत्तम पुरुष

प्रश्न 8 श्रीमद्भगवद्गीतायाः एकं श्लोकं सरलार्थसहितेन लिखत ।

.....

.....

.....

.....

रचनात्मक कार्यम् -

एकदिनस्य स्व-आहारस्य तालिका-निर्माणम् कुरुत । चित्र माध्यमेन च ताम् उत्तरपुस्तिकायाम् प्रदर्शयत ।

ST. COLUMBUS SCHOOL

DayalBagh, Surajkund, Faridabad-121009 (Haryana)

WINTER BREAK ASSIGNMENT
SUBJECT- MATHEMATICS
CLASS - VI

NAME: _____ SEC.: _____ ROLL NO. _____ DATE: _____

1. A perimeter of a rectangular park is 460 m. If its length is 223 m, what will be its breadth? Also find the area of this rectangular park?
2. A shopkeeper is selling a whole cake in Rs. 360. One day he thought that he must sell the cake in pieces. So he cuts the cake into 13 pieces and sold Rs. 34.50 per piece. Determine whether he gets more amount by selling cake into pieces or less.
3. Mahesh had Rs. 645 with him. He bought 5 notebooks at Rs. 30 per notebook, 4 sets of pen at Rs. 20.48 per set and 2 sets of geometry box at Rs. 75.59 per geometry box. How much money is left with him?
4. What should be added to $\frac{5}{12}$ to get $2\frac{3}{8}$?

5. The following pictograph shows the number of absentees in a class of 35 students during the previous week:

Days	No. of absentees (\$=2 absentees)
Monday	\$\$\$\$\$
Tuesday	\$\$\$\$
Wednesday	\$\$\$\$\$\$
Thursday	\$\$\$
Friday	\$\$\$\$
Saturday	\$\$\$\$\$\$

- (i) How many students are absent in the whole week?

- (ii) On which day most no. of students are absent?

- (iii) On which day least no. of students are absent?

6. Fill in the blanks:

- (i) Perimeter of a rectangle is _____.
- (ii) Perimeter of an octagon is _____.
- (iii) A fraction whose denominator is less than numerator is called _____.
- (iv) 0.034 km = _____ m.
- (v) A table showing the frequency of various observations is called _____.
- (vi) $30.5 + 23.005 =$ _____.
- (vii) The perimeter of a hexagon having side 2.5 cm will be _____.
- (viii) A fraction whose numerator is greater than zero but less than its denominator is called _____ fraction.
- (ix) If the numerator and denominator of a fraction have no common factor (except 1), then the fraction is said to be in _____ form.
- (x) Two (or more) fractions having same denominator are called _____ fractions.

7. Match the following:

- | | |
|---------------------------------|----------------------------|
| (i) $\frac{2}{7}, \frac{3}{8}$ | (a) $4 \times \text{side}$ |
| (ii) $3 + \frac{4}{100}$ | (b) $\frac{27}{72}$ |
| (iii) Perimeter of square | (c) Unlike fractions |
| (iv) $13 + (2 \times (-3))$ | (d) 3.04 |
| (v) Equivalent of $\frac{3}{8}$ | (e) 7 |

ST. COLUMBUS SCHOOL

DayalBagh, Surajkund, Faridabad-121009 (Haryana)

WINTER BREAK ASSIGNMENT SUBJECT- SCIENCE CLASS - VI

NAME: _____ SEC.: _____ ROLL NO. _____ DATE: _____

1. Put a plant in a room away from sunlight and see what happens to its growth. Explain your observation.



2. Given below is a list of different types of movements in animals.

Running, Jumping, Walking, Slithering, Crawling, Flying, Swimming, Creeping

Write the types of the movement seen in each animal.

a) Duck _____

b) Horse: _____

c) Kangaroo: _____

d) Snail : _____

e) Snake : _____

f) Fish : _____

g) Human beings : _____

h) Cockroach: _____

3. Underwater divers wear fin-like flippers on their feet. Explain why?

4. An electric bulb is connected to a cell through a switch, as shown in figure when the switch is brought in the "ON" position, the bulb does not glow. What could be the possible reason for it? Mention any two reasons.



5. Germinate the moong seeds in various conditions and observe if they sprout or not and mention the reason for the same.

a) Seeds not soaked in water : _____

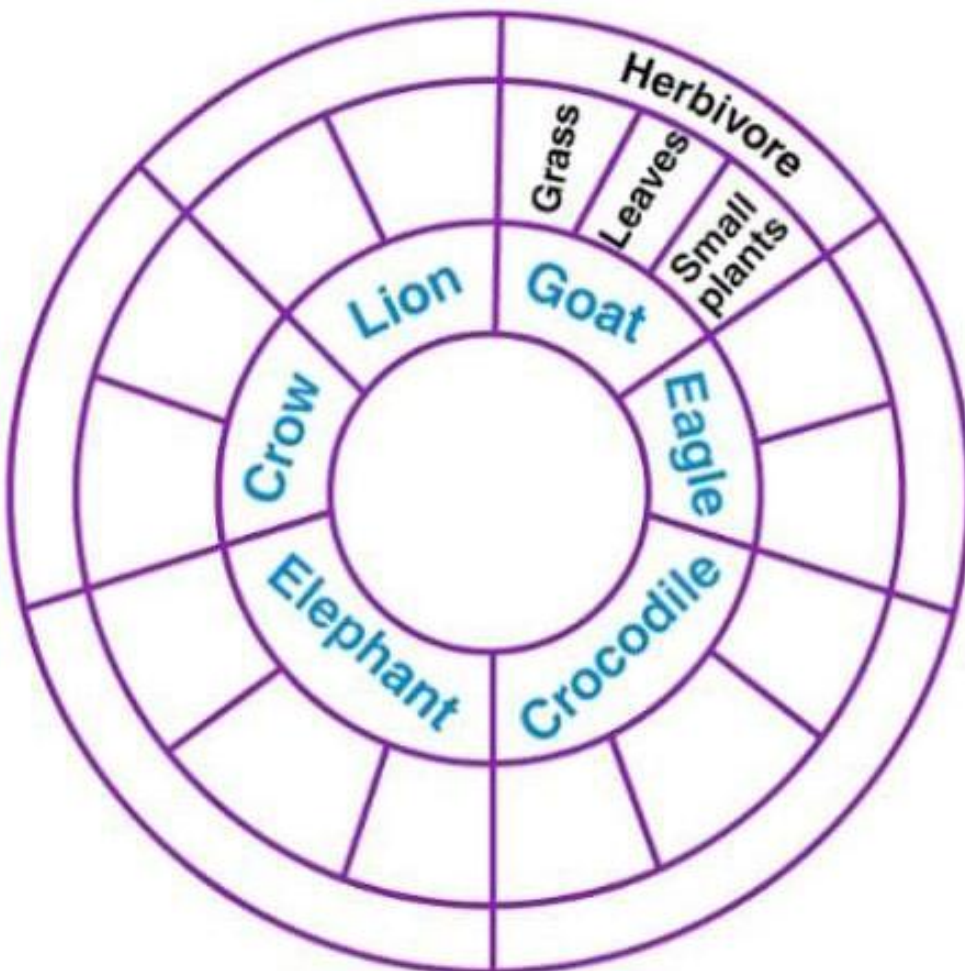
b) Darkroom: _____

c) Sunlight: _____

d) Ice: _____

e) Submerged in water: _____

6. Read the names of the animals written in the inner ring of the given figure . Within the second ring write the type of food they eat and category to which they belong to (based on the eating habits) in the outermost lining.



ST. COLUMBUS SCHOOL

Dayal Bagh, Surajkund, Faridabad-121009 (Haryana)

WINTER BREAK ASSIGNMENT

SUBJECT- SOCIAL SCIENCE

CLASS – VI

NAME: _____ SEC.: _____ ROLL NO. _____ DATE: _____

QA. Choose the correct option.

- _____ was the capital of Maurya Dynasty.
a) Ujjain b) Taxila c) Pataliputra
- _____ is the author of Arthashastra.
a) Megasthenes b) Chanakya c) Mahamatta
- Punch marked coins were made of _____.
a) Iron b) Silver c) Gold
- Mathura was an important _____.
a) Village b) Religious centre c) Port
- For what purpose magnetic compass is used?
a) For measuring distance b) For showing symbols c) For finding the directions
- The Indian island in the Arabian sea is known as _____.
a) Andaman and Nicobar Island (b) Maldives c) Lakshadweep
- Which hills are located in Rajasthan?
a) Aravalli hills (b) Nilgiri c) Himalayas
- A piece of land surrounded by water on three sides is called _____.
a) Island (b) Peninsula c) Strait
- India share land boundaries with _____ countries.
a) Five (B) Six C) Seven
- Which is the highest court of India?
a) High Court b) District Court c) Supreme Court

QB. Fill in the blanks.

- _____ was the founder of Mauryan empire.
- The most important ruler of the Satavahanas was _____ .

3. _____ is the ratio between the actual distance on the ground and distance shown on the map.
4. Symbols fixed through international agreement are called _____.
5. _____ were the associations of craft persons.
6. Sri Lanka is separated from India by the _____.
7. Island neighbours of India are _____ and _____.
8. The _____ delta, the world's largest delta is situated at the mouth of the Ganga and Brahmaputra rivers.
9. The organ of the government that protects and guards the laws of the country is _____.
10. The word 'suffrage' means _____.
11. _____ was the poet laureate in Harshavardhana's court.
12. The military leaders who provided the king with troops whenever he needed them, were called _____.
13. The government chosen by the people is _____.
14. The main crop of Kalpattu village is _____.
15. Giving water to the crops is known as _____.

QC. Match the following.

- | | |
|------------------------|--------------|
| i) Tiny marine animals | Samudragupta |
| ii) Musician king | Sahyadris |
| iii) Western ghats | Ashoka |
| iv) Kalpattu village | Polyps |
| v) Kalinga war | Tamil Nadu |

Q D. Answer the following questions.

1. What is the meaning of the term 'dynasty'?

2. Describe various types of maps.

3. Describe the term 'Himalayas'. Write the name of its ranges.

4. Give the names of countries that share land boundaries with India.

5. Draw symbol for the following.

1. Pond

2. Temple

3. Railway line

4. Bridge

5. Well

6. Settlements

Q6. On the political map of India given below, locate all the states of India.



Q7. Draw a plan of your classroom and show the teacher's table, blackboard, desks and windows.

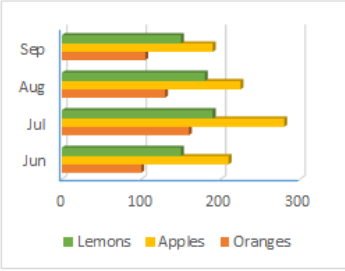
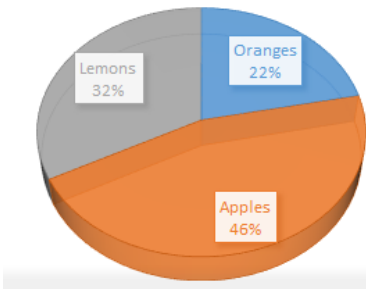
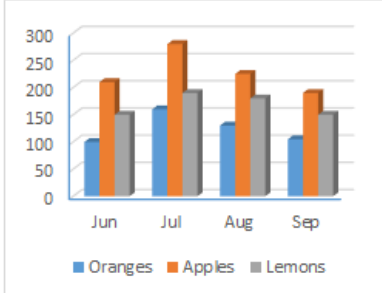
ST. COLUMBUS SCHOOL

Dayal Bagh, Surajkund, Faridabad-121009 (Haryana)

WINTER BREAK ASSIGNMENT SUBJECT-COMPUTER CLASS- VI

NAME: _____ SEC. _____ ROLL NO. _____ DATE: _____

Q1. Name the types of following charts. Mention at least 2 points of each.

<p>1.</p>  <table border="1"><thead><tr><th>Month</th><th>Lemons</th><th>Apples</th><th>Oranges</th></tr></thead><tbody><tr><td>Jun</td><td>150</td><td>220</td><td>100</td></tr><tr><td>Jul</td><td>200</td><td>280</td><td>180</td></tr><tr><td>Aug</td><td>180</td><td>230</td><td>120</td></tr><tr><td>Sep</td><td>160</td><td>200</td><td>110</td></tr></tbody></table>	Month	Lemons	Apples	Oranges	Jun	150	220	100	Jul	200	280	180	Aug	180	230	120	Sep	160	200	110	<p>2.</p>  <table border="1"><thead><tr><th>Fruit</th><th>Percentage</th></tr></thead><tbody><tr><td>Lemons</td><td>32%</td></tr><tr><td>Apples</td><td>46%</td></tr><tr><td>Oranges</td><td>22%</td></tr></tbody></table>	Fruit	Percentage	Lemons	32%	Apples	46%	Oranges	22%	<p>3.</p>  <table border="1"><thead><tr><th>Month</th><th>Oranges</th><th>Apples</th><th>Lemons</th></tr></thead><tbody><tr><td>Jun</td><td>110</td><td>220</td><td>160</td></tr><tr><td>Jul</td><td>170</td><td>290</td><td>200</td></tr><tr><td>Aug</td><td>140</td><td>240</td><td>190</td></tr><tr><td>Sep</td><td>120</td><td>200</td><td>160</td></tr></tbody></table>	Month	Oranges	Apples	Lemons	Jun	110	220	160	Jul	170	290	200	Aug	140	240	190	Sep	120	200	160
Month	Lemons	Apples	Oranges																																															
Jun	150	220	100																																															
Jul	200	280	180																																															
Aug	180	230	120																																															
Sep	160	200	110																																															
Fruit	Percentage																																																	
Lemons	32%																																																	
Apples	46%																																																	
Oranges	22%																																																	
Month	Oranges	Apples	Lemons																																															
Jun	110	220	160																																															
Jul	170	290	200																																															
Aug	140	240	190																																															
Sep	120	200	160																																															

Q2. What is E-mail? What are the advantages of E-mail?

Ans. _____

Q3. Define the following terms:

a. Table Styles: _____

b. Chart: _____

c. Themes: _____

d. Slide: _____

e. Web Sites: _____

f. Emoticons: _____

g. Hyperlink: _____

Q4. Write the acronyms for the following:

LOL		CU	
ABT		4EVER	
F9		ASAP	
GR8		FAQ	

Q5. Make an e-card to wish Happy New Year online or in PowerPoint. Send by using e-mail.