

ST. COLUMBUS SCHOOL

Dayal Bagh, Surajkund, Faridabad-121009 (Haryana)

WINTER BREAK ASSIGNMENT

SUBJECT- ENGLISH

CLASS – VII

NAME: _____ SEC. _____ ROLL NO. _____ DATE : _____

Q1. Q1. Read the passage given below and answer the questions that follow.

A young man was getting ready to graduate from college. For many months he had admired a beautiful sports car in a dealer's showroom and knowing his father would not afford it, he told him that was all he wanted. As the Graduation Day approached, the young man awaited signs of his father's purchase of the car. Finally, on the morning of his graduation, his father called him into his private study. His father told him how proud he was to have such a fine son and told him how much he loved him. He handed his son a beautifully wrapped gift box. Curious but somewhat disappointed, the young man opened the box and found a lovely, leather bound Bible, with the young man's name embossed in gold. Angry, he raised his voice to his father and said, "With all your money, you give me a Bible?" and stormed out of the house, leaving the Bible.

Many years passed and the young man was successful in business. He had a beautiful home and a wonderful family. Though he was still angry with his father, he realized that his father was very old and thought perhaps he should go to meet him. He had not seen him since that Graduation Day. Before he could make arrangements, he received a telegram telling him that his father had passed away and willed all his possession to his son. He needed to come home immediately and take care of things. When he arrived at his father's house, sudden sadness and regret filled his heart. He began to search through his father's important papers and saw the still new Bible, just as he had left it years ago. With tears, he opened the Bible and began to turn the pages. And as he did, a car key dropped from the back of the Bible. It had a tag with the dealer's name, the same dealer who had the sports car he had desired. On the tag was the date of his graduation, and the words 'PAID IN FULL'.

i. Where did the father call the young man?

ii. What did the man's father tell him on his Graduation Day?

iii. What made the young man angry?

iv. Why was the young man filled with sadness and regret?

v. What did the young man find as he opened the Bible?

vi. Make sentences with these words.

(a) admired (b) disappointed

Q2. You met your old friend in the market today after five years. Write a diary entry expressing your thoughts and emotions on the meeting.

Q3. Fill in the blanks in the paragraph given below by choosing the most appropriate options.

In the lively city, (a) _____ strolled down the busy avenue, manoeuvring through the crowd (b) _____. (c) _____, someone tapped (d) _____ on the shoulder, and he turned around to find an old acquaintance. Surprised, they greeted (e) _____ warmly and caught up on (f) _____ lives (g) _____. Despite the noise of the city, they communicated (h) _____, sharing anecdotes and making each other laugh. Eventually, they parted with a promise to meet again soon, waving goodbye as they headed in opposite directions.

- a) (i) him (ii) he (iii) his (iv) me
- b) (i) here (ii) skillfully (iii) there (iv) rarely
- c) (i) annually (ii) extremely (iii) it (iv) Suddenly
- d) (i) him (ii) his (iii) we (iv) I
- e) (i) another (ii) well (iii) each other (iv) late
- f) (i) their (ii) them (iii) his (iv) you
- g) (i) harshly (ii) quickly (iii) loudly (iv) impatiently
- h) (i) quite (ii) slightly (iii) effortlessly (iv) soon

Q4. Identify and write the type of sentences.

- i. The report starts with an appropriate headline.
- ii. Have you packed your things?
- iii. Please switch the kitchen lights off.

iv. How melodiously she sings!

Q5. Re-arrange the following words/ phrases to make meaningful sentences.

i. covered/her/Anita/notebook/brown/with/paper

ii. wherever/ like/ you/ sit/ you may

iii. good/physical/is/jogging/for/fitness

iv. cotton/ clothes/ wear/ summer/ we/ during

v. others/ Reema/ is/ helpful/ always/ to

vi. devotees/ for/ the/ well- being/ prayed/ of/ the/ all

Q6. Rewrite these sentences in the negative and interrogative forms.

i. They have climbed the hill.

ii. The gardener knows enough about plants.

iii. They came out of the school.

iv. Meenu has already eaten her chocolate.

v. My father is reading newspaper.

Q7. Identify and write the kind of adverb.

- i. Sarah is feeling better today.
- ii. I almost ate a rotten apple.
- iii. Tom plays football outside.
- iv. I have never baked a cake.

Q8. Answer the following questions.

i. Describe the relationship between Vashti and Kuno.

ii. What were Hari's mixed feelings when he posted the postcard?

iii. What was Hari's job in Sri Krishna Eating House and what kind of working environment was prevalent there?

iv. Write down the character sketch of 'Jagu'

v. Write down summary of the poem 'Home and Love'.

Q9. Read the extract and answer the following questions.

“ So a new boy at the Sri Krishna Eating House,” called the gentleman.

i. Name the chapter and its writer.

ii. Who is ‘new boy’ being referred to in the above line?

iii. Who was the old man here?

iv. To whom was this comment made?

Q10. Make a comic strip related to your chapter ‘The Sri Krishna Eating House’ on A4 size sheet by changing the climax in the end and giving your own twist to it. (Note- It should be colourful and attractive)

ST. COLUMBUS SCHOOL

Dayal Bagh, Surajkund, Faridabad-121009 (Haryana)

WINTER BREAK ASSIGNMENT

SUBJECT-HINDI

CLASS- VII

NAME: _____ SEC. ____ ROLL NO. _____ DATE: _____

प्रश्न 1 निम्नलिखित शब्दों के अर्थ लिखिए ।

(क) दुर्गति _____ (ग) दस्तूर _____

(ख) रजनी _____ (घ) कुलाहल _____

प्रश्न 2 निम्नलिखित रिक्त स्थान की पूर्ति कीजिए ।

(क) 'भोर और बरखा' की कवयित्री _____ हैं।

(ख) _____ ने राधा के अंडे तोड़ दिए थे ।

(ग) विशेषण की _____ अवस्थाएँ हैं।

(घ) जिस क्रिया के प्रयोग में कर्म की अपेक्षा रहती है, उसे _____ कहते हैं।

प्रश्न 3 निम्नलिखित वाक्यों में क्रिया रेखांकित करके भेद बताइए।

(क) मोहन पत्र लिख रहा है। _____

(ख) राधा पढ़ती है। _____

(ग) माँ जलेबी बना रही है। _____

(घ) प्रवीन सो रहा है। _____

प्रश्न 4. निम्नलिखित शब्दों में से विशेषण और विशेष्य शब्द छाँटकर लिखिए ।

विशेषण

विशेष्य

(क) मुझे लाल फूल चाहिए। _____

(ख) राघव बुद्धिमान छात्र है। _____

(ग) मुझे सवा मीटर कपड़ा चाहिए । _____

(घ) अंगूर खट्टे हैं। _____

प्रश्न 5. निम्नलिखित वाक्यों में क्रिया विशेषण का भेद लिखिए ।

(क) वह धीरे-धीरे चल रहा है। _____

(ख) घोड़ा तेज़ दौड़ा । _____

(ग) वह लगातार बोल रहा है। _____

(घ) इतना खाओ जितना पचा सको। _____

प्रश्न 6. निम्नलिखित प्रश्नों के उत्तर लिखिए ।

(क) मीरा को सावन मनभावन क्यों लगने लगा है?

(ख) मिठाईवाले में वे कौन से गुण थे जिनकी वजह से बच्चे तो बच्चे, बड़े उसकी ओर खिंचे चले आते थे ?

(ग) जालीघर में रहनेवाले सभी जीव एक-दूसरे के मित्र बन गए थे, पर कुब्जा के साथ ऐसा संभव क्यों नहीं हो

पाया?

ST. COLUMBUS SCHOOL

Dayal Bagh, Surajkund, Faridabad-121009 (Haryana)

WINTER BREAK ASSIGNMENT SUBJECT: SANSKRIT CLASS-VII

NAME: _____ SEC: _____ ROLL NO: _____ DATE: _____

प्रश्न 1 शब्दार्थाः लिखन्तु।

- क) क्षमा ख) पोषकम्
- ग) प्रेषय घ) निधि:

प्रश्न 2 एकपदेन उत्तरत।

- क) कस्याः भाषायाः काव्यसौंदर्यं अनुपमम् ?
- ख) काः अभ्युदयाय प्रेरयन्ति ?
- ग) कौटिल्येन रचितं शास्त्रं किम् ?

प्रश्न 3 प्रश्नानाम् उत्तराणि पूर्णवाक्येन लिखत।

- क) संस्कृतस्य वाङ्मयं कैः समृद्धं अस्ति ?

.....

.....

- ख) अद्यत्वे छात्राः विद्यालये किं किं निःशुल्कं प्राप्नुवन्ति ?

.....

.....

प्रश्न 4 पंच संबंधिनाम् नामानि संस्कृतहिन्दी भाषयोः लिखन्तु ।

संस्कृत	हिन्दी
1
2
3
4
5

प्रश्न 5 संस्कृते संख्यावाचिशब्दान् लिखत ।

क) 33 ख) 35..... ग) 50.....

प्रश्न 6 'नम् धातु रूपाणि लृट्कारे लिखत ।

पुरुष	एकवचनम्	द्विवचनम्	बहुवचनम्
प्रथम पुरुष
मध्यम पुरुष
उत्तम पुरुष

प्रश्न 7 श्रीमद्भगवद्गीतायाः एकं श्लोकं सरलार्थसहितेन लिखत ।

.....

.....

.....

.....

• रचनात्मक कार्यम् -

प्रातःकालीन चित्रं निर्मित्वा पञ्चवाक्यानि संस्कृतेन लिखत । चित्र माध्यमेन च ताम् उत्तरपुस्तिकायाम् प्रदर्शयत ।

ST. COLUMBUS SCHOOL

DayalBagh, Surajkund, Faridabad-121009 (Haryana)

WINTER BREAK ASSIGNMENT SUBJECT- MATHEMATICS CLASS – VII

NAME: _____ SEC: _____ ROLL NO: _____ DATE: _____

Q1. Fill in the blanks

- (i) $0.07 \times 20.09 =$ _____.
 - (ii) The value of $5 \times [6 + (-2) + 3 - 5] =$ _____.
 - (iii) The longest side of the right-angled triangle is _____.
 - (iv) Multiplicative inverse of $-17\frac{1}{5}$ is _____.
 - (v) Prime factor of 216 in exponential form is _____.
 - (vi) The standard form of 12359.52 is _____.
 - (vii) $231.5 \div 1000 =$ _____.
 - (viii) The coefficient of x^2 in expression $-4x^2y + 100y^2x^2 - 7x^2$ is _____.
 - (ix) The expanded form of 28019615 is _____.
 - (x) Define triangle inequality property.
-

Q2. Match the following:-

- | | |
|---|--------------------------------|
| (i) $H^2 = P^2 + B^2$ | a) $y=13$ |
| (ii) $3y + 5 = 44$ | b) 40.5 |
| (iii) $89.1 \div 2.2$ | c) Pythagoras property |
| (iv) Standard form of $\frac{112}{128}$ | d) $2^3 \times 7^2 \times a^2$ |
| (v) $2 \times 2 \times 2 \times 7 \times 7 \times a \times a$ | e) $\frac{7}{8}$ |

Q3. In a triangle PQR, side QR has been produced to the point S. If angle PRS = 115° and angle RPS = 45° , then find angle PQR ?

Q4. If $m = 2$, find the value of $3m^3 + 2m^2 - m + 2$.

Q5. Simplify and express in exponential form $(12^3 \times 3^4 \times 4) \div (3 \times 32)$.

Q6. From a rope 68 m long, pieces of equal size are cut. If the length of one piece is $4\frac{1}{4}$ m, find the number of such pieces?

Q7 If $x = \frac{11}{12}$ and $y = -\frac{17}{24}$, find the value of :-

(i) $x + y$

(ii) $x - y$

(iii) $x \times y$

(iv) $x \div y$

ST. COLUMBUS SCHOOL

DayalBagh, Surajkund, Faridabad-121009 (Haryana)

WINTER BREAK ASSIGNMENT

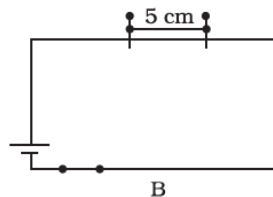
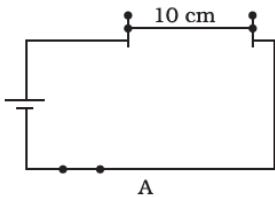
SUBJECT: SCIENCE

CLASS-VII

NAME:-----SEC. : ----- ROLL NO: ----- DATE: -----

Q1.Reema took a wire of length 10 cm. Seema took a wire of 5 cm of the same material and thickness. Both of them connected the wires, as shown in the circuit given in Figure . The current flowing in both circuits is the same.

1. Will the heat produced in both the cases be equal? Explain.
2. Will, the heat produced be the same if the wires taken by them are of equal lengths but of different thicknesses? Explain.



Q2. You are given three mirrors of different types. How will you identify each one of them?

Q3. Place a piece of bread in a moist and warm place for few days. Observe it after few days. What will you see?

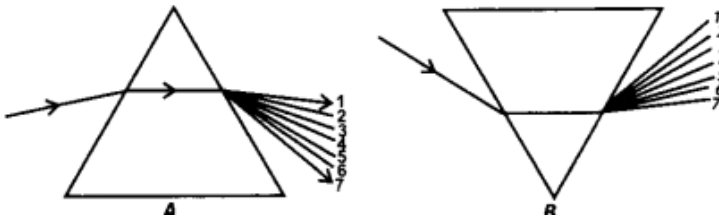
- (a) Name the organism that grows on the bread piece?
- (b) What are the thread-like projections called?
- (c) What is the knob like structure present on the top of thin stem called?
- (d) Which type of reproduction does this organism show?
- (e) From where does the spores come to the bread piece?

Q4. The given image shows a patient whose kidneys have stopped functioning . The patient is under medical care . Answer the questions related to the image.

- (i) What happens when the kidneys of a person stop functioning ?
- (ii) Name and define the process shown in the image .
- (iii) What is the name of the machine shown in the image ?



Q5 State the correct sequence (1-7) of colours in the spectrum formed by the prisms A and B shown in the figure.



ST. COLUMBUS SCHOOL

DayalBagh, Surajkund, Faridabad-121009 (Haryana)

WINTER BREAK ASSIGNMENT SUBJECT: SOCIAL SCIENCE CLASS-VII

Name:-----Section: ----- Roll no: ----- Date: -----

Q.A. Multiple choice questions.

1. Kathak is associated with several parts of _____.
a. North India b. South India c. West India
2. Who was the last Nawab of Awadh?
a. Shahjahan b. Wajid Ali Shah c. Akbar
3. The Sikhs organized themselves into a number of bands called _____.
a. Jathas b. Khalsa c. Kunbis
4. Who was brought up by muslim julaha / weaver?
a. Guru Nanak b. Meerabai c. Kabir
5. _____ were historical works written by the Ahoms.
a. Buranjis b. Jatis c. Paiks
6. _____ is the hard top layer of the earth.
a. Hydrosphere b. Lithosphere c. Atmosphere
7. When do we celebrate “World Water Day”?
a. 5 June b. 22 March c. 22 April
8. _____ is the thin layer of air that surrounds the earth.
a. Hydrosphere b. Biosphere c. Atmosphere
9. _____ is also known as Khapa- Chan.
a. Ladakh b. Kerala c. Sahara
10. Hemis in Ladakh is a famous _____.
a. Monastery b. Temple c. Church

Q.B. Fill in the blanks.

1. The _____ mentions that Garha Katanga had 70,000 villages.
2. _____ had started the practice of common kitchen (langar).
3. _____ was the house of rest for travellers , especially one kept by a religious order.
4. _____ is a Persian word meaning a spiritual guide.
5. Sawai Raja jai Singh founded his new capital at Jaipur and was given the subadari of Agra in _____ year.
6. Al-Azizia in the _____ desert ,South of Tripoli,Libya recorded the highest temperature in 1922.
7. The finest cricket bats are made from the wood of the _____ trees.
8. Generally the warm ocean currents originate near _____.
9. Tsunami or the harbor wave struck havoc in the _____ ocean on 26 December 2004.
10. Environment word has been taken from _____ word “Environer”.

Q.C. Answer the following questions.

1. What do you know about ‘Chauth’ and ‘Sardeshmukhi’?

Ans. _____

2. Define Pirs.

Ans. _____

3. Write a note on “Sahara desert”.

Ans. _____

ST. COLUMBUS SCHOOL

DayalBagh, Surajkund, Faridabad-121009 (Haryana)

WINTER BREAK ASSIGNMENT
SUBJECT- COMPUTER
CLASS – VII

Name-_____ Section. _____ Roll No. _____ Date: _____

Q 1. What do you mean by Relative cell referencing and Absolute cell referencing in MS Excel?

**Q 2. How is a Formula different from a Function in Excel? How will you write the formula for the following?
Multiply the value in cell A1 by 10, add the result by 5, and divide it by 2.**

Q 3. What is computer ethics? Write any five computer ethics and unethical practices.

Q4. Write the output of the following functions:

Functions	Output
=sum(12,45,33,23,22)	
=product(45,2,2)	
=today()	
=now()	
=len("computer science")	
=concatenate("Hello", " Computer")	
=max(34,44,56,54)	

Q 5. Visit a shopping mall with your parents and purchase any 10 items and make a bill in Excel file as same as received by you from mall.

Or

Make a PPT on 5 top famous websites used in India.